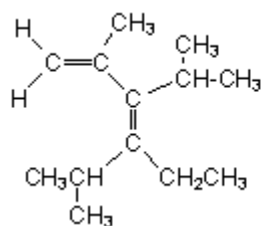
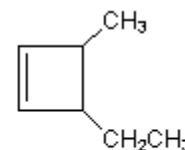
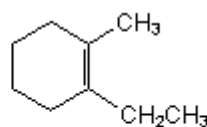
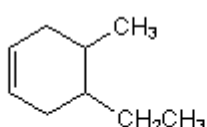
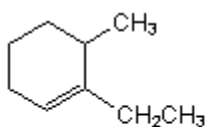


## Quiz 20

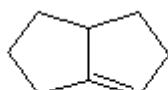
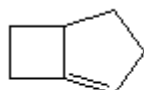
1. Give the compound below an acceptable IUPAC name.



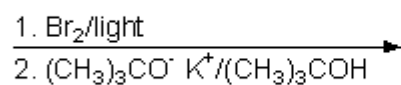
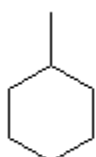
2. Place the following alkenes in increasing order of stability (1=least, 4=most stable).



3. Label the compounds below as stable or unstable.



4.



5.

